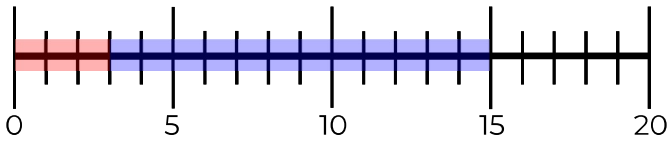
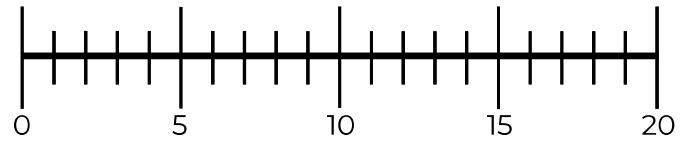


# Zahlenstrahl

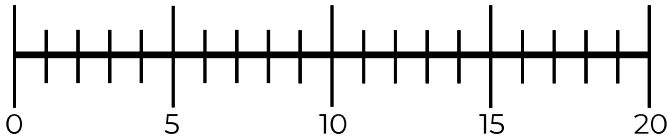
Rechne und zeichne ein.



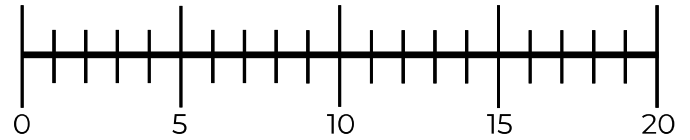
$$3 + 12 = 15$$



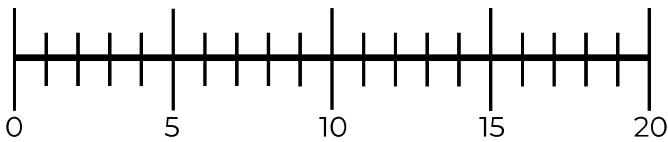
$$2 + 11 = \underline{\hspace{2cm}}$$



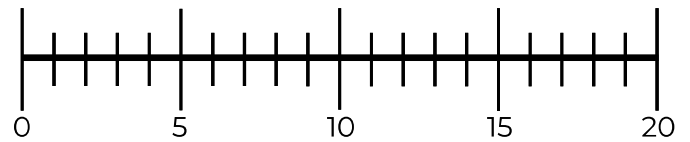
$$9 + 6 = \underline{\hspace{2cm}}$$



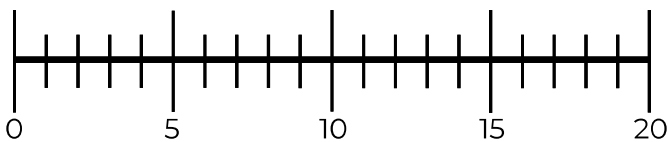
$$9 + 11 = \underline{\hspace{2cm}}$$



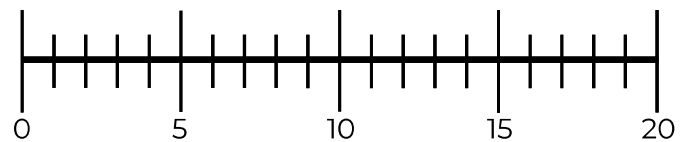
$$12 + 4 = \underline{\hspace{2cm}}$$



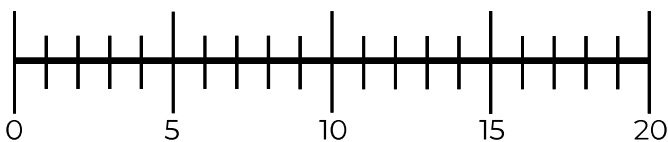
$$4 + 12 = \underline{\hspace{2cm}}$$



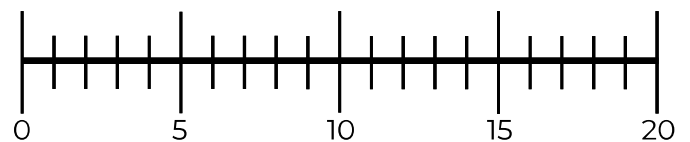
$$7 + 8 = \underline{\hspace{2cm}}$$



$$12 + 7 = \underline{\hspace{2cm}}$$



$$9 + 9 = \underline{\hspace{2cm}}$$



$$2 + 6 = \underline{\hspace{2cm}}$$

