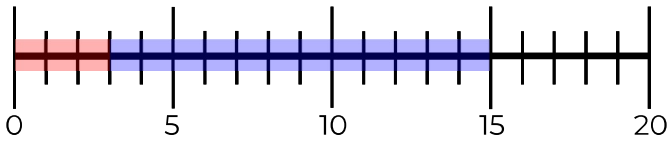
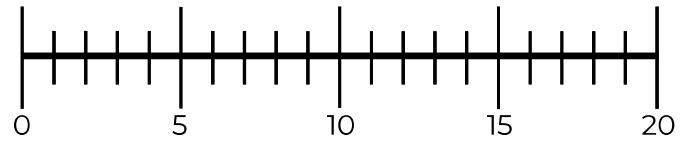


# Zahlenstrahl

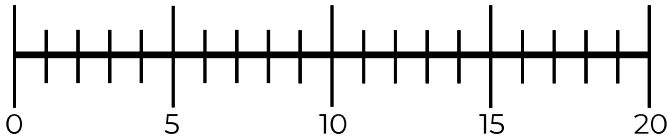
Rechne und zeichne ein.



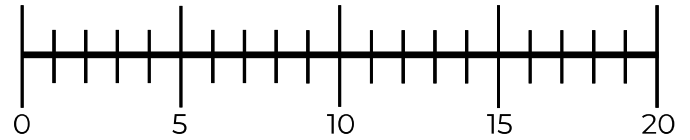
$$3 + 12 = 15$$



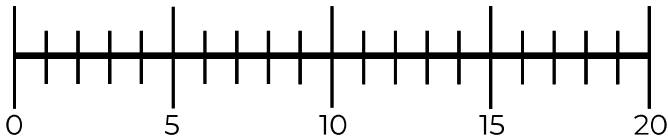
$$13 + 5 = \underline{\quad}$$



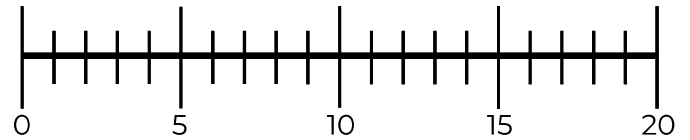
$$2 + 9 = \underline{\quad}$$



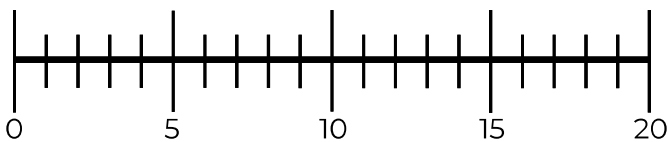
$$9 + 4 = \underline{\quad}$$



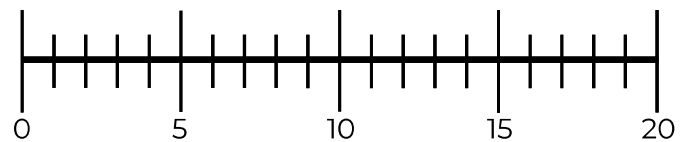
$$1 + 7 = \underline{\quad}$$



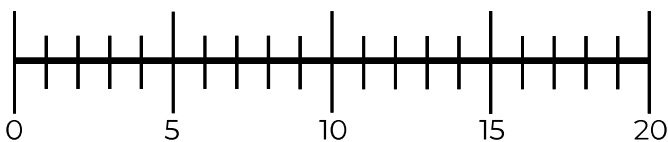
$$5 + 9 = \underline{\quad}$$



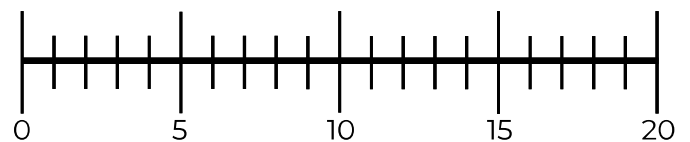
$$9 + 7 = \underline{\quad}$$



$$4 + 4 = \underline{\quad}$$



$$8 + 8 = \underline{\quad}$$



$$1 + 16 = \underline{\quad}$$

